

# DOWNLOAD PDF DOCUMENT



## PRENTICE HALL BIOLOGY C...

**DOWNLOAD DOCUMENT NOW**

**Updated:** 11/02/2017

---

### **DISCLAIMER:**

BE-FIRST.CO uses the following prentice hall biology chapter 13 test book available for free PDF download which is also related with

### **PRENTICE HALL BIOLOGY CHAPTER 13 TEST**

It is so easy to download prentice hall biology chapter 13 test and hundreds of other files from our digital library. Which is more, you don't have to pay for this service. It is completely free! To start with you have to follow the link below, download the program and register on the site. It is fast. No money is needed. Then you get a free access to prentice hall biology chapter 13 test and other PDF documents which can also be downloaded to your PC or other devices and used when needed. Don't think that we get some profit from registration. It is because of constant hackers' attacks that do harm to our library and prevent our users from downloading prentice hall biology chapter 13 test and other files. Registration helps to make the process of using our eBook library more comfortable. When you pass the registration, you can get prentice hall biology chapter 13 test immediately. So, if you or your friend needs prentice hall biology chapter 13 test, just make simple steps and get as many books as you need for free

---

**DOWNLOAD NOW**

# DOWNLOAD PDF DOCUMENT

# DOWNLOAD PDF DOCUMENT

## PRENTICE HALL BIOLOGY C...

### [EXAMVIEW - CHAPTER 14 TEST REVIEW- WILLIAMS.TST](#)

Name: Period: Date: K. Williams ID: A8th Grade Chapter 14 TEST REVIEW 1. Determine the volume of the cylinder. Use 3.14 for  $\pi$ . 2. Complete the table to identify the effect tripling the radius of a cylinder's base has on its volume. Cylinder radius Cylinder Area of Cylinder Height Cylinder Volume (cm<sup>3</sup>) r Base (cm) A  $\pi r^2$  (cm<sup>2</sup>) h (cm) V  $\pi r^2 h$  1 1 3 1 9 1 3. Identify the radius, diameter, and height ...

**File name:** ExamView - Chapter 14 Test Review- Williams.pdf  
[Download now or Read Online](#)

### [MICROSOFT WORD - CHAPTER 2 TEST REVIEW ANSWERS.DOCX](#)

Honors Geometry Chapter 2 Test Review Question Answers 1. Given:  $BA \perp AT$   $(51 - x) + (y + 9) = 180$  Find:  $m\angle MAT$  ?  $y = 120 + x$   $(y + 9) + (x + y) = 90$  B ?  $x + 2y = 81$   $x + 2(120 + x) = 81$  ?  $x + 240 + 2x = 81$  ?  $3x = -159$  M  $51 - x + y + 9$  N  $A + x + y$  ?  $x = -53$  T ?  $y = 120 + (-53) = 67$  ?  $m\angle MAT = 180 - (x + y) = 180 - 14 = 166$  2. A certain angle is 39 less than 2 times its complement. Find its supplement.  $x = 2(90 - \dots$

**File name:** Chapter 2 Test Review Answers.pdf  
[Download now or Read Online](#)

### [MICROSOFT WORD - CHAPTER 11 TEST REVIEW QUESTION ANSWERS.DOCX](#)

Honors Geometry Chapter 11 Test Review Question Answers 1. Find the area of an equilateral triangle that has sides that measure 8 7 .  $s^2 = 3 A_{Equ.} = 4 (8 7)^2 = 3 448 3 = = (112 3) u^2 = 4 4 2$ . A rotor of a Wankel automotive engine has the geometric shape shown. The center of each arc is the opposite vertex of the equilateral triangle. a. Find the figure's area a.  $A = A + 3(A_{Segment})$  b. Find the figur...

**File name:** Chapter 11 Test Review Question Answers.pdf  
[Download now or Read Online](#)

### [IB CHAPTER 8 TEST FORM 2A DO NOT WRITE ON TEST](#)

For any credit show all work on a separate sheet of paper for all problems. 13.14. IB Chapter 8 Test Free Response Name: Date; Per: Answer each question on a separate sheet of paper. For each problem do the following: a. Copy or draw a figure. Mark the figure up with the given information. b. Show all calculations. c. Make sure your final answer has the correct units. 1.2.3.4.5. 6. ???? Bonus: a.b. ...

**File name:** Chapter 8 Test Form 2A including Free Response IB.pdf  
[Download now or Read Online](#)





















# DOWNLOAD PDF DOCUMENT

# DOWNLOAD PDF DOCUMENT

Here below another book similar with:

## PRENTICE HALL BIOLOGY C...

---

-  [prentice hall biology chapter 13 test](#)
-  [prentice hall biology chapter 11 review answers](#)
-  [prentice hall biology workbook answer key chapter 19](#)
-  [biology prentice hall miller levine test chapter6](#)
-  [prentice hall living environment answer key biology](#)
-  [prentice hall biology answer keys](#)
-  [pearson prentice hall biology answer keys](#)
-  [biology workbook a answers prentice hall](#)
-  [prentice hall biology microscope lab answer key](#)
-  [prentice hall miller levine biology guided reading and study workbook student spanish edition 2004](#)
-  [prentice hall chemistry workbook answers chapter 11](#)
-  [prentice hall conceptual physics answers chapter 25](#)
-  [prentice hall chemistry guided reading and study workbook answers chapter 10](#)
-  [geometry test answers prentice hall form](#)
-  [principles of electric circuits conventional current version 8th edition 8th eighth edition authors floyd thomas I 2006 published by prentice hall hardcover](#)
-  [economics prentice hall quiz answer key](#)
-  [prentice hall literature 2010 all in one workbook grade 09](#)
-  [interpreting political cartoons prentice hall](#)
-  [prentice hall practice geometry workbook answer key](#)
-  [prentice hall chemistry review atomic structure](#)

# DOWNLOAD PDF DOCUMENT