

DOWNLOAD PDF DOCUMENT



PRE ALGEBRA CHAPTER 4 T...

DOWNLOAD DOCUMENT NOW

Updated: 10/28/2017

DISCLAIMER:

BE-FIRST.CO uses the following pre algebra chapter 4 test book available for free PDF download which is also related with

PRE ALGEBRA CHAPTER 4 TEST

It is so easy to download pre algebra chapter 4 test and hundreds of other files from our digital library. Which is more, you don't have to pay for this service. It is completely free! To start with you have to follow the link below, download the program and register on the site. It is fast. No money is needed. Then you get a free access to pre algebra chapter 4 test and other PDF documents which can also be downloaded to your PC or other devices and used when needed. Don't think that we get some profit from registration. It is because of constant hackers' attacks that do harm to our library and prevent our users from downloading pre algebra chapter 4 test and other files. Registration helps to make the process of using our eBook library more comfortable. When you pass the registration, you can get pre algebra chapter 4 test immediately. So, if you or your friend needs pre algebra chapter 4 test, just make simple steps and get as many books as you need for free

DOWNLOAD NOW

DOWNLOAD PDF DOCUMENT

DOWNLOAD PDF DOCUMENT

PRE ALGEBRA CHAPTER 4 T...

[EXAMVIEW - CHAPTER 14 TEST REVIEW- WILLIAMS.TST](#)

Name: Period: Date: K. Williams ID: A8th Grade Chapter 14 TEST REVIEW 1. Determine the volume of the cylinder. Use 3.14 for π . 2. Complete the table to identify the effect tripling the radius of a cylinder's base has on its volume. Cylinder radius Cylinder Area of Cylinder Height Cylinder Volume (cm³) r Base (cm) A πr^2 (cm²) h (cm) V $\pi r^2 h$ 1 1 3 1 9 1 3. Identify the radius, diameter, and height ...

File name: ExamView - Chapter 14 Test Review- Williams.pdf
[Download now or Read Online](#)

[MICROSOFT WORD - CHAPTER 2 TEST REVIEW ANSWERS.DOCX](#)

Honors Geometry Chapter 2 Test Review Question Answers 1. Given: BA $\angle A$ (51 - x) + (y + 9) = 180 Find: m \angle MAT $\angle y = 120 + x$ (y + 9) + (x + y) = 90 B $\angle x + 2y = 81$ x + 2(120 + x) = 81 $\angle x + 240 + 2x = 81$ $\angle 3x = -159$ M 51-x y+9 N A x+y $\angle x = -53$ T $\angle y = 120 + (-53) = 67$ \angle MAT = 180 - (x + y) = 180 - 14 = 166 2. A certain angle is 39 less than 2 times its complement. Find its supplement. x = 2(90 - ...

File name: Chapter 2 Test Review Answers.pdf
[Download now or Read Online](#)

[PRE-ALGEBRA](#)

PRE-ALGEBRA ELCA Middle School Program Directions: SHOW ALL WORK ON PAPER AND STAPLE TO THIS PACKET. THIS PACKET IS DUE ON THE FIRST DAY BACK FOR THE 2012 2013 SCHOOL YEAR! Summer Math Study Guide Name and homeroom 2012 Perform the indicated operations without using a calculator. Pre-Algebra Summer Study Guide 2 1. 45,879 + 21,786 2. 327 + 428 + 569 + 787 + 209 3. 2003 + 149 + 58 + 3426 4. 6080 3059 5....

File name: summer pre-algebra study guide 2012.pdf
[Download now or Read Online](#)

[MICROSOFT WORD - CHAPTER 11 TEST REVIEW QUESTION ANSWERS.DOCX](#)

Honors Geometry Chapter 11 Test Review Question Answers 1. Find the area of an equilateral triangle that has sides that measure 8 7 . s 2 3 A Equ. = 4 (8 7) 2 3 448 3 = = (112 3) u 2 4 4 2. A rotor of a Wankel automotive engine has the geometric shape shown. The center of each arc is the opposite vertex of the equilateral triangle. a. Find the figure's area a. A = A + 3(A Segment) b. Find the figure...





















File name: Chapter 11 Test Review Question Answers.pdf
[Download now or Read Online](#)

DOWNLOAD PDF DOCUMENT

DOWNLOAD PDF DOCUMENT

Here below another book similar with:

PRE ALGEBRA CHAPTER 4 T...

-  [total english pre intermediate teachers resource book and test master cd rom pack with pre intermediate teachers resource book for pack and pre intermediate test master cd rom for pack](#)
-  [pre algebra chapter 4 test](#)
-  [apexvs learning answers pre algebra](#)
-  [pre algebra with pizzazz answer key page 210](#)
-  [common core pre algebra](#)
-  [amsco pre algebra answer](#)
-  [prentice hall mathematics pre algebra answer key](#)
-  [pre algebra with pizzazz answer key page 29](#)
-  [algebra 1 grade 9 standard test practice workbook holt algebra](#)
-  [algebra 2 practice test chapter 1](#)
-  [holt algebra 2 chapter test](#)
-  [algebra 2 chapter 3 test](#)
-  [chapter 6 mid test algebra 2](#)
-  [geometry pre assessment test answer](#)
-  [physioex exercise 3 activity pre lab and post test answers](#)
-  [common core assessment readiness algebra 1 houghton mifflin harcourt holt mcdougal algebra 1](#)
-  [naruto chapter book vol 2 naruto chapter books](#)
-  [short dialogue for teaching pre intermediate english](#)
-  [truck driver pre trip inspection checklist](#)
-  [language leader pre intermediate](#)

DOWNLOAD PDF DOCUMENT